

I can count in equal steps
of 50 and 100
18.1.21

Monday 18/01/21

L.O. I can count in equal steps of 50 and 100.

If you know how to count in 10's, then counting in 100's will be easy!

10 20 30 40 50 60 70 80 90 100

and back

10 20 30 40 50 60 70 80 90 100

Try in 100's

100 200 300 400 500 600 700 800 900 1000

and back

100 200 300 400 500 600 700 800 900 1000

Monday 18/01/21

L.O. I can count in equal steps of 50 and 100.

Let's start from any number, what do you notice?

The tens and ones stay the same, only the hundreds digit will change:

78 178 278 378 478 578 678 778 878 978 1078

341 441 541 641 741 841 941 1041 1141 1241

197 297 397 497 597 697 797 897 997 1097

Monday 18/01/21

L.O. I can count in equal steps of 50 and 100.

Next let's count in 5's:

5 10 15 20 25 30 35 40 45 50
and back

5 10 15 20 25 30 35 40 45 50

Now try in 50's

50 100 150 200 250 300 350 400 450 500
and back

50 100 150 200 250 300 350 400 450 500

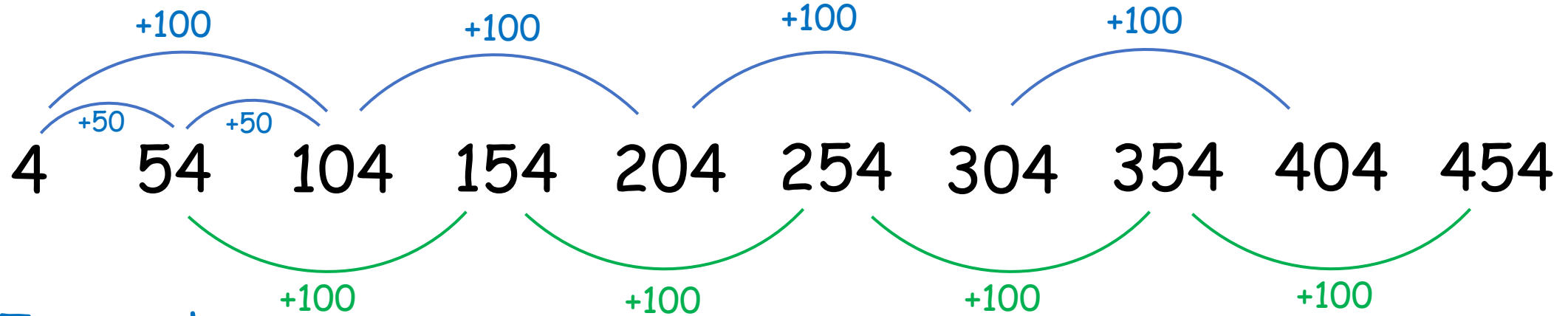
Monday 18/01/21

L.O. I can count in equal steps of 50 and 100.

Let's try starting from different numbers:

4 54 104 154 204 254 304 354 404 454

Do you notice anything?



Try another one:

23 73 123 173 223 273 323 373 423 473

19 69 119 169 219 269 319 369 419 469

Monday 18/01/21.

L.O. I can count in equal steps of 50 and 100.

Have a go at today's Maths Task activity sheets:

Mild: fill in the missing numbers in the grid.
Notice how the numbers go up in 10's across the rows and in 100's down each column.

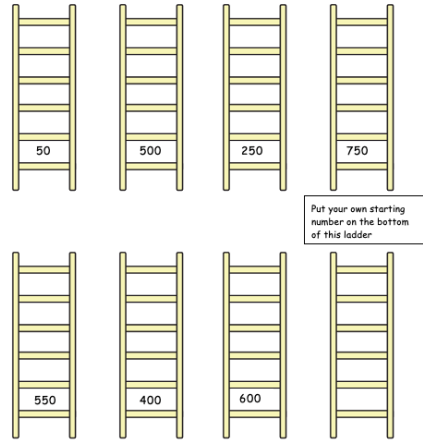
Count in steps of 100

Fill in the missing numbers.

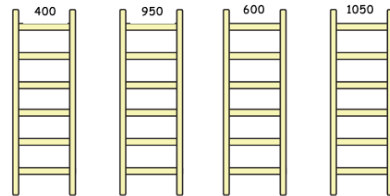
10	20	30	40	50	60	70	80	90	100
110	120	130	140	150	160	170			200
210	220	230	240		260	270		290	
310	320	330	340			370			
			440			470	480		
510		530	540			570			600
610		630	640		660	670		690	700
		730	740			770			800
		830	840			870			900
910	920	930	940	950		970	980		1000

Spicy: fill in the missing numbers on the ladders

Count in steps of 50 up each ladder to see what number belongs at the top.



Can you count back in steps of 50 down each ladder to see what number belongs at the **bottom**?



Hot: fill in the missing numbers in each number sequence.
Check carefully whether the numbers go in jumps of 50 or 100.

Count in steps of 100 and 50

Write the missing numbers in these sequences:

- 48, 148, , , 448, , , 748, , , 1048
- 3, 103, , , , , 603, , , , 1003
- 28, , 228, , , , , 728, , 928,
- 1010, 910, , , 610, , , , 210, ,
- 50, 100, 150, , , , 350, , , , 550
- 7, 57, 107, , , , 307, , , 457
- 35, 85, , , 235, , , 385, , ,
- 94, , 194, 244, , , 394, , , 544,