


Everyone should complete the first two pages. If you find these straightforward then challenge yourself with one or more of the tasks that follow these first two. There is also a Chilli Challenge at the very end! Have fun!

There are **6** plates.

**4** of them are round.

There are  square plates.



There are **5** seats.

There are **4** stools.


There is  chair.



There are **10** flowers.

**6** of them are not in the vase.


There are  flowers in the vase.



There are   
meals **left**.



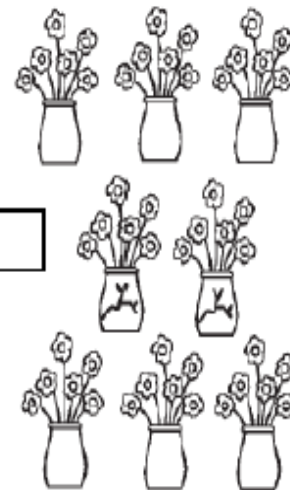
There are   
flowers **left**.



There are   
stools **left**.




There are   
vases **left**.



There are   
drinks **left**.



There are   
balloons **left**.




# subtraction – how many are left? 1


1 There are 6  in total.


2  melt.

How many  are left?




There are   left.




2 There are 8  lit.

5  go out.

How many  are still lit?



There are   still lit.

- 3 a) There are 6 . 1  is cut down.  
How many  are left?




There are  


- b) There are 9 . 1  is cut down.  
How many  are left?




There are   left

- 4 a) There are 10 .






 fly away.   are left.



- b) There are 10 .







 fly away.   is left.

- 5 I have 7  but 4 break.   
How many  are left?



Use  to  
represent the .

- 6 If 2  have popped and  
I have 3  left, how  
many  did I start with?

Sparks started with  .



## Reflect

Is the answer always less?



I can work out how many are left by

---

---

---



For a real Chilli Subtraction Challenge, go to the Challenge section of NumBots: <https://play.numbots.com/#/account>

