



There are plates
altogether.



There are vases
altogether.

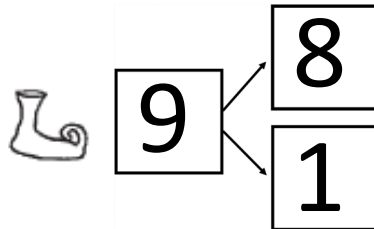


There are seats
altogether.

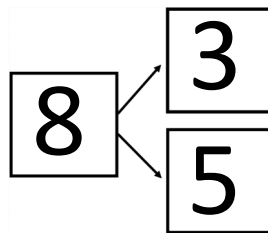



There are glasses
altogether.

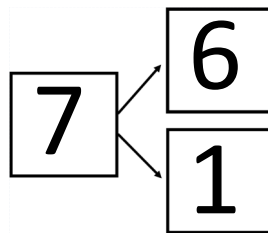
Use cubes of two different colours. Put your cubes on objects to prove the part-part-whole model and the equation.



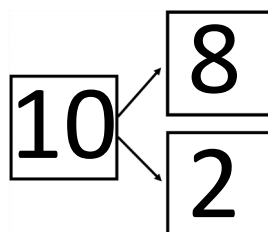
$$8 + 1 = 9$$



$$8 = 3 + 5$$




$$6 + 1 = 7$$



$$10 = 8 + 2$$

Use cubes of two different colours. Put the cubes on the dwarves. Match the equations with the pictures.


$$4 + 3 = 7$$



$$6 = 3 + 3$$



$$2 = 1 + 1$$



$$2 + 4 = 6$$




$$3 = 1 + 2$$



$$7 = 5 + 2$$



$$1 + 0 = 1$$



$$7 + 0 = 7$$



$$2 + 2 = 4$$

